

2nd Grade
Week 2

DAY

3

Name: _____ Date: _____

Mark'em Up!

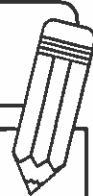
Directions: Read the words. Scoop the syllables and mark the syllable types.

flea	beak	teeth	sweep
heat	cheek	street	squeak
chimney	valley	hockey	fifteen
creek	eat	sheet	keep

Directions: Read the sentences. Scoop and mark the syllable types and vowel sounds.

1. There was a turkey in my yard.
2. We went to the seashore last week.
3. Fran saw a chimpanzee at the zoo.
4. How many books did you read last month?
5. Do you like to eat beef?

Bonus: Choose one sentence from above and draw a picture to match it on the back of this page.



Making Lemonade

Making lemonade is very easy to do. With a few simple ingredients, you can turn those sour lemons into a sweet and refreshing drink. First, you will need to gather your ingredients including some lemons, some water, and some sugar. Next, slice your lemons in half. Be sure to squeeze them to get all of the juice out. Then, pour your lemon juice into a pitcher and add enough water to fill the pitcher the rest of the way. After that, add some sugar and stir it really well so that it dissolves in the water. Finally, place the lemonade into the refrigerator so it can chill. After a few hours, you are ready to enjoy a refreshing glass of lemonade.

1. What is the first step in making your own lemonade?

- a. squeeze the lemons
- b. stir the sugar
- c. gather the ingredients

2. What is the third step in making your own lemonade?

- a. slice the lemons
- b. pour the lemon juice into a pitcher and add water
- c. enjoy some lemonade

3. How do you get lemon juice from the lemon?

4. What would happen if you skipped the fourth step?

Name _____

Arrays

Draw an array of 16 Xs.
The first row is done for you.

X X X X

How many rows are there? _____

How many are in each row? _____

Word Problem

Farmer Brown has 38 cows, 19 horses, and 56 sheep. How many animals does he have on his farm altogether?



_____ animals



Subtraction

$$\begin{array}{r} 729 \\ -286 \\ \hline \end{array}$$

$$\begin{array}{r} 946 \\ -483 \\ \hline \end{array}$$

Place Value

What is the value of the underlined digit?

1. 429 _____



2. 832 _____

3. 679 _____



Money

Allison has 2 quarters and 5 dimes in her piggy bank. Brandon has 4 quarters and 1 nickel in his piggy bank. Draw the money in each bank and answer the questions.



1. How much money is in Allison's bank? _____ 2. How much money is in Brandon's bank? _____

NAME:

RAINFOREST WORD PROBLEMS

1. Tony the toucan ate 41 insects and 29 berries. How many more insects did Tony eat than berries?

2. Timmy the toucan is 33 centimeters tall. Tony the toucan is 65 centimeters tall. How much taller is Timmy than Tony?

3. Bianca the boa constrictor laid 44 eggs in the spring and 48 eggs in the summer. How many eggs did she lay in all?

4. Bianca the boa constrictor laid 26 eggs. Beyonce the boa laid twice as many eggs as Bianca. How many eggs did Beyonce lay?

5. There is a troop of 20 howler monkeys living in the canopy of the rainforest. 8 of the monkeys are fully grown while the rest are still young. How many of the monkeys are still young?

6. There are 150 different kinds of butterflies that live in the understory of the rainforest. Eliza could only spot 75 of the different kinds. How many did Eliza not see?

Name _____

★ Writing Prompt

Choose a sport you know well. Supply the facts about the sport (equipment needed, rules of the game, number of players). Include details and definitions. Use linking words to connect ideas.

★ Checklist

- Introduce the topic.
- Supply the facts.
- Use linking words.
- Conclude.

★ Illustration



★ Title _____

Four sets of horizontal writing lines, each consisting of a solid top line, a dashed middle line, and a solid bottom line.

Name _____

Handwriting practice lines consisting of 12 rows. Each row is defined by a solid top line, a dashed middle line, and a solid bottom line.

Color Key

1 - blue

2 - yellow

3 - orange

4 - green


5 - brown

6 - red

7 - pink

8 - black

Name: _____



Color by number. Art

Week 2