

2nd Grade  
Week 2

DAY

2

Name: \_\_\_\_\_ Date: \_\_\_\_\_

## Mark'em Up!

Directions: Read the words and mark them up. The first one is done for you.

bark r	chart	horn	storm
shark	porch	farm	corn
sort	yard	fork	park
lark	short	mark	barn

Directions: Read the sentences and mark the r-controlled syllables.

1. Timmy had art class every Monday.
2. Tess got a pretty scarf from the shop.
3. There was a big storm yesterday afternoon.
4. Megan was born in March.
5. Jake liked to read books about sharks.



Tory Osborn and Carmel Gomez are best friends even though they live very far away from **each** other.

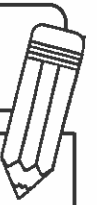
Tory lives on a farm in upstate New York and Carmel lives in New York City. They only get to be together **once** a year when their two **families** visit. Sometimes the Gomez family **goes** to upstate New York and sometimes the Osborns drive to the city.

Tory and Carmel try to write **each** other once a **week** and they chat on-line even more often. Lately, they have been thinking that they would like to change places. Tory thinks the city is so much fun. She loves riding the **subway** and **playing** with the kids from Carmel's apartment complex. There are so many people there that a kid can never get lonely. There is always a game of jacks, or jump rope, or basketball going on. Tory's farm is quite far from any of her friends so she is often **bored**. She also gets **tired** of all her chores.

Carmel thinks Tory is crazy to want to move away from the farm. She thinks the farm is the best place to be. She loves the big, grassy yard and the barn full of animals. She likes to chase the chickens and help milk the **cows**. There aren't many cars and buses so it is **nice** and quiet. She has been begging her mom and dad to visit more often.

Mrs. Gomez said she would call Mrs. Osborn to set up a time for the girls to visit. She did not think the girls would have much fun if they did change places because then they would not have **each** other. Mrs. Osborn said that she would be happy to have Carmel come and visit for a bit. Then Tory could go back and **stay** with Carmel for a while. Mr. Gomez and Mr. Osborn said they could share the driving. Carmel and Tory think this is the best plan ever!

Name \_\_\_\_\_



## The President's Job

Have you ever wondered what it takes to become president of the United States? Anyone who wants to be president is called a candidate. They must be at least 35 years old. They must also be a natural born citizen, which means they were born in the United States. Also, they have to have lived in the country for 14 years.

The American people vote for the president every four years, in November. The president does his job for four years. This is called a term. Presidents cannot serve more than two terms.

The president's job is split into two different roles. The president is considered the chief executive of the federal government and the commander in chief of the armed forces (military). As the chief executive, the president makes laws, gives speeches, talks to the press, makes important decisions, and travels often. As the commander in chief, the president can send troops into battle.

1. What is the main topic of this passage?

the president's job

how to vote for the president

important laws

2. What is the main idea of the first paragraph?

---

3. What is one detail of the first paragraph?

---

4. What is the main idea of the third paragraph?

---

Name \_\_\_\_\_

## Arrays

Draw an array of 15 Xs.  
The first row is done for you.

X X X X X

How many rows are there? \_\_\_\_\_

How many are in each row? \_\_\_\_\_

## Money Word Problem

Jeremy has 2 quarters and 1 nickel. Draw another way to show this amount.



## Subtraction



$$\begin{array}{r} 923 \\ - 247 \\ \hline \end{array}$$

$$\begin{array}{r} 464 \\ - 296 \\ \hline \end{array}$$

## Place Value

What is the value of the underlined digit?

1. 367 \_\_\_\_\_

2. 338 \_\_\_\_\_

3. 892 \_\_\_\_\_



## Two-Step Word Problem

Jessica baked 45 chocolate chip cookies, 36 sugar cookies, and 59 peanut butter cookies. How many cookies did she make altogether?

Her school was having a bake sale and she sold 100 cookies. How many cookies does she have left?

Name: \_\_\_\_\_

## Three Digit Subtraction With Regrouping Ones

$$\begin{array}{r} 397 \\ - 289 \\ \hline \end{array}$$

$$\begin{array}{r} 328 \\ - 229 \\ \hline \end{array}$$

$$\begin{array}{r} 487 \\ - 349 \\ \hline \end{array}$$

$$\begin{array}{r} 457 \\ - 238 \\ \hline \end{array}$$

$$\begin{array}{r} 857 \\ - 629 \\ \hline \end{array}$$

$$\begin{array}{r} 865 \\ - 259 \\ \hline \end{array}$$

$$\begin{array}{r} 957 \\ - 508 \\ \hline \end{array}$$

$$\begin{array}{r} 993 \\ - 864 \\ \hline \end{array}$$

$$\begin{array}{r} 456 \\ - 339 \\ \hline \end{array}$$

$$\begin{array}{r} 925 \\ - 819 \\ \hline \end{array}$$

$$\begin{array}{r} 352 \\ - 227 \\ \hline \end{array}$$

$$\begin{array}{r} 263 \\ - 104 \\ \hline \end{array}$$

$$\begin{array}{r} 512 \\ - 107 \\ \hline \end{array}$$

$$\begin{array}{r} 268 \\ - 149 \\ \hline \end{array}$$

$$\begin{array}{r} 460 \\ - 348 \\ \hline \end{array}$$

$$\begin{array}{r} 312 \\ - 109 \\ \hline \end{array}$$

$$\begin{array}{r} 252 \\ - 153 \\ \hline \end{array}$$

$$\begin{array}{r} 468 \\ - 129 \\ \hline \end{array}$$

$$\begin{array}{r} 278 \\ - 109 \\ \hline \end{array}$$

$$\begin{array}{r} 620 \\ - 407 \\ \hline \end{array}$$

$$\begin{array}{r} 453 \\ - 126 \\ \hline \end{array}$$

$$\begin{array}{r} 891 \\ - 385 \\ \hline \end{array}$$

$$\begin{array}{r} 226 \\ - 107 \\ \hline \end{array}$$

$$\begin{array}{r} 821 \\ - 308 \\ \hline \end{array}$$

$$\begin{array}{r} 488 \\ - 209 \\ \hline \end{array}$$

Name \_\_\_\_\_


### ★ Writing Prompt

Write a fictional narrative story about a family of mice that live under the floorboards in your bedroom. Be sure your story has a problem and solution.

### ★ Checklist

- Recount the events.
- Include details.
- Use temporal words.
- Conclude.

### ★ Illustration



★ Title \_\_\_\_\_

Four sets of primary writing lines, each consisting of a solid top line, a dashed middle line, and a solid bottom line.


Name \_\_\_\_\_

Handwriting practice lines consisting of 15 rows. Each row is defined by a solid top line, a dashed middle line, and a solid bottom line.



# The Bunny Hokey Pokey

Week 2



**You put your bunny ears in,  
You put your bunny ears out.  
You put your bunny ears in and you shake them all about.  
You do the Bunny Pokey and you hop yourself around.  
That's what it's all about!**

**You put your bunny nose in,  
You put your bunny nose out.  
You put your bunny nose in and you shake it all about.  
You do the Bunny Pokey and you hop yourself around.  
That's what it's all about!**

**You put your bunny paws in,  
You put your bunny paws out.  
You put your bunny paws in and you shake them all about.  
You do the Bunny Pokey and you hop yourself around.  
That's what it's all about!**

**You put your cotton tail in,  
You put your cotton tail out.  
You put your cotton tail in and you shake it all about.  
You do the Bunny Pokey and you hop yourself around.  
That's what it's all about!**

**You put your bunny body in,  
You put your bunny body out.  
You put your bunny body in and you shake it all about.  
You do the Bunny Pokey and you hop yourself around.  
That's what it's all about!**