






Name: \_\_\_\_\_ Date: Friday - Week 2

Today is: Monday Tuesday Wednesday Thursday  
Friday

### What is your favorite bug?

grasshopper 	beetle 
caterpillar 	ladybug 

Draw a Picture



©Teaching Bill Fizz Cend 2016

-----

-----

-----

-----

-----

-----

-----

🔗 I used capital letters. ☆ I used spaces. ☆ I used punctuation.



## The New Kid

by ReadWorks



Dylan was the new kid in class. He had moved to the city from a small town. Dylan sat with Kamil and James at lunch.

"This school is different. It is big," Dylan said. "There are so many kids here. My old school was small. It only had 50 kids."


"There are 500 kids here. That *is* different," Kamil said.

"I had friends there," said Dylan.



"Now you have friends here," said James. "That part is the same!"

Name: \_\_\_\_\_ Date: Friday-Week 2


1. Who is Dylan?



2. Where did Dylan move from?



3. How is Dylan's new school different from his old school?



*It is bigger.*



*It is smaller.*

4. How is Dylan's new school the same as his old school?



*There are animals at school.*



*He has friends at school.*

5. When did Dylan sit with Kamil and James?

---

---

---

---

---

---

---

---

6. What did you learn from "The New Kid"?

---

---

---

---

---

---

---




---

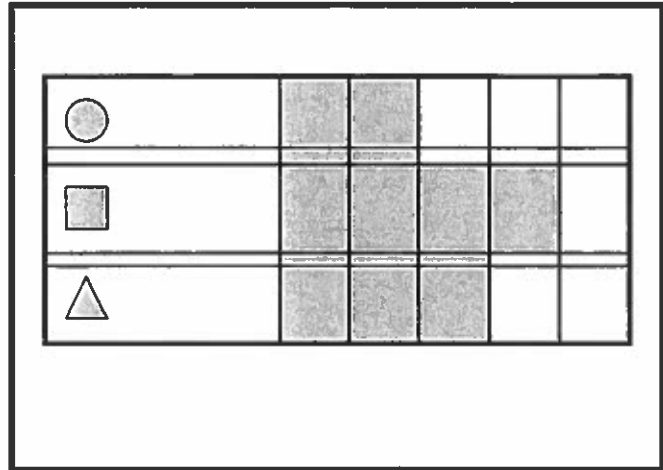
7. Draw a picture of Dylan at his new school with his new friends.

## Lesson 6 Reteach







### Read Bar Graphs

You can read a bar graph to find how many.  
The end of the bar tells how many.

Favorite Shapes		
Shape	Tally	Total
 circle		2
 square		4
 triangle		3

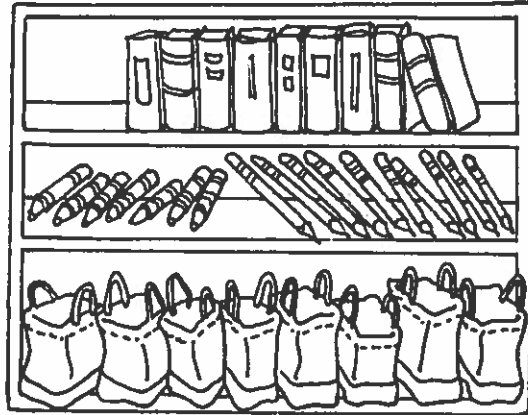


Use the graph. Answer the questions.

- How many ? 2
- How many ? \_\_\_\_\_
- How many ? \_\_\_\_\_
- How many ? \_\_\_\_\_
- Which shape has the **more** votes than the ?  
Draw it. \_\_\_\_\_
- Which shape has **less** votes than the ?  
Draw it. \_\_\_\_\_

## Lesson 6 Enrich

*Read Bar Graphs*



**Count the number of each object. Fill in the tally chart. Color the bar graph to show how many.**

School Supplies		
Supply	Tally	Total
Book		
Crayon		
Pencil		
Bookbag		

School Supplies										
Book										
Crayon										
Pencil										
Bookbag										
	1	2	3	4	5	6	7	8	9	10
	Number of Supplies									

**How many are on the shelf?**

1. \_\_\_\_\_ 2. \_\_\_\_\_ 3. \_\_\_\_\_

4. How many more than are there? \_\_\_\_\_